

**DEPARTMENT OF EDUCATION, SANGLI MISSION SOCIETY  
ANNUAL EXAM 2019 – 20**

**STD : VII**

**SCIENCE**

**MARKS: 40**

**Q.1.A. Fill In The Blanks. 4.**

1. Combination of two or more cells is called \_\_\_\_\_
2. Arteries and veins are joined by a network of \_\_\_\_\_.
3. The water bearing layer of the earth is \_\_\_\_\_.
4. An image formed by a concave \_\_\_\_\_ cannot be obtained on screen.

**Q. 1.B. Match The Following 2.**

- | A  | B                            |
|--|------------------------------|
| 1. A Plane mirror                                | a. Water disinfectant        |
| 2. Ozone   | b. Protect soil from erosion |
| 3. Forest  | c. The image is erect        |
| 4. A material used for making filament of a bulb | d. The image is real         |
|  | e. Tungsten                  |

**Q1.C. State whether true or false and correct the false statement 4.**

1. An electromagnet does not attract a piece of iron.
2. The reproductive part of the plant is the flower.
3. A real image cannot be obtained on the screen.
4. Rain is the ultimate source of water.

**Q.2.A. Multiple choice questions 5.**

1. Microorganisms act upon the dead plants to produce  
a. Sand      b. mushroom      c. humus      d. wood
2. In cockroaches, air enters the body through  
a. Lungs      b. gills      c. spiracles      d. skin
3. Circuit breaker device which can be used in place of fuse in domestic electric wiring is called:  
a. DCB      b.MCD      c.MCB      d.BCM
4. Which of the following is not responsible for water shortage?  
a. Rapid growth of industries      b. Heavy rainfall  
c. Increasing population      d. Mismanagement of water resources
5. Bryophyllum can reproduce by its:  
a. Stem      b. leaves      c. roots      d. flower

**Q.2.B. Name The Following 3.**

1. The principle on which an electric bell work
2. The main respiratory Organs in humans
3. An instrument used to measure the distance moved by a vehicle.

**Q.3. Answer The Following (Any 6) 12.**

1. You have been asked to maintain a garden . How will you minimize the use of water ?
2. Give Reason: We often sneeze when we inhale a lot of dust-laden air.
3. Differentiate between real image and virtual image
4. Draw a neat labeled diagram of 'Human Excretory System'.
5. Electromagnet cannot be used for separating plastic bags from a garbage heap. Explain.
6. Explain how ground water is recharged.
7. Why blood is needed by all the parts of a body?
8. Write a note on dispersion of light.

**Q.4. Answer In Brief (Any 5) 15.**

1. When the current is switched on through a wire, a compass needle kept nearby gets deflected from its north-south position. Explain.
2. State characteristics of the image formed by a plane mirror. Identify and explain the characteristic property of the image formed by a plane mirror shown below.



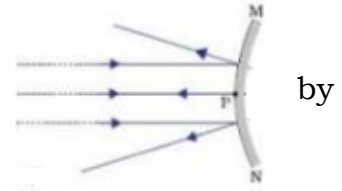
3. Draw symbols for the following electric circuit components
  - i) Battery
  - ii) Switch in 'ON' position
  - iii) Electric cell
  - iv) Wire
  - v) electric bulb
  - vi) Switch in 'OFF' position
4. Describe any three methods of asexual mode of reproduction.
5. What are components of blood?
6. Describe the importance of forest.
7. A distance between two stations is 240 km. A train takes 4 hrs to cover this distance. Calculate the speed of the train.

**Q.5. Answer In Detail (Any 1)**

**5.**

**1.A. Observe the diagram shown below and answer the questions that follow.**

- i. Name the type of mirror. 1.
- ii. Where is this mirror used 1.
- iii. State the characteristics of the image formed such mirrors. 1.



**B. Draw and name the two types of lenses 2.**

2. Make a sketch showing groundwater and water table and label it. Explain the factors responsible for the depletion of water table. **5.**

\*\*\*\*\*

DEPARTMENT OF EDUCATION, SANGLI MISSION SOCIETY  
ANNUAL EXAM 2019 – 20

STD : VII

GENERAL KNOWLEDGE

MARKS: 25

Q1) Choose the correct answer.

[5]

(Coconut, Dr Anoop Gupta, Desktop, oxygen, Chess.)

1. The symbol O in chemistry stands for-----
2. The PageMaker Program is used for ----- publishing
3. Technology Consultant to Bill Gates .-----.
4. The largest Seed in the world quite commonly Found in India.-----
5. FIDE rating are given for which game.-----.

Q2) Match the following.

[5]

- |                             |                           |
|-----------------------------|---------------------------|
| 1. Lady Ratan Tata Cup      | a) Noble in Medicine 1945 |
| 2. Jawahar Challenge Trophy | b) Gramophone             |
| 3. Alexander Fleming        | c) Noble in Physics 1921  |
| 4. Albert Einstein          | d) Hockey                 |
| 5. Edison                   | e) Air racing             |

Q3) True or False.

[5]

1. The first Afro-Asia Games was held in Hyderabad.
2. India has never won a gold in Olympics.
3. K.M.Beenamol and Anjali Bhagwat won the Rajiv Gandhi khel Ratna Award.
4. Milk is a mixture of water proteins and fats and carbohydrates.
5. Measuring of electricity is done by odometer.

Q4. Answer the following.

[5]

1. Who holds the world record of Six-Sixes in an over?
2. What is a Winchester disk drive?
3. What does DOST stand for?
4. Who has Written "Tiger's Tale"?
5. What is the minimum thickness of Plastic Bags Prescribed by the Government of India?

Q5. Identify the given pictures.

[5]

1.



2.



3.



4.



5.



\*\*\*\*\*

**DEPARTMENT OF EDUCATION, SANGLI MISSION SOCIETY  
ANNUAL EXAM 2019 – 20**

**STD : VII**

**HISTORY & CIVICS**

**MARKS: 30**

**HISTORY**

**Q.I.A) Fill in the blanks with the appropriate word given in the brackets: 3**

- 1) The place where Maharani Tarabai proclaimed her son Shivaji II as Chhatrapati \_\_\_\_\_.  
a) Kolhapur    b) Panhala    c) Pune    d) Shrivardhan
- 2) \_\_\_\_\_ captured Sambhaji Maharaj at Sangmeshwar.  
a) Aurangzeb    b) Zulfikar Khan  
c) Mukarrabkhan    d) Khafikhan
- 3) Bahirji Naik was the head of \_\_\_\_\_ department.  
a) Health    b) Intelligence    c) Education    d) Administration

**B) Name the following: 3**

- 1) A council of eight ministers.
- 2) She took the charge of the Indore Administration.
- 3) The brother of Nanasaheb Peshwa.

**C) Arrange the following in Chronological order: 2**

- 1) The battle of Rakshasbhuvan
- 2) The death of Tipu Sultan
- 3) The death of Madhavrao Peshwa
- 4) The battle of Panipat
- 5) The battle of Buradi Ghat

**Q.II. A) Answer the following questions in one sentence: 4**

- 1) What is meant by Chauthai?
- 2) Who created an independent kingdom in Bundelkhand?
- 3) Who risked their life at the time of Maharaj's escape from Agra?
- 4) Name any two Sea forts you know.

**B) Give Reason: (Any 2) 4**

1. Shivaji Maharaj raised a Navy.
2. Delhi needed the help from the Marathas.
3. It was decided that the Raigad fort should be fought under the leadership of Maharani Yesubai.

**Q.III Answer the following questions in Brief: (Any 2) 4**

- 1) Write a short note on Balaji Vishwanath.
- 2) Write the after effects of the battle of Panipat.
- 3) Write in brief about the valour shown by Mahadji Shinde.

**CIVICS**

**Q.IV A) Fill in the blanks: 2**

- 1) We can approach the \_\_\_\_\_ in case of infringement of our right.
- 2) Everyone gets rights at \_\_\_\_\_.

**Q.V A) Answer the following questions in one sentence: 4**

- 1) What is meant by 'Fundamental Rights'?
- 2) Name the kind of Writs for Protection from illegal arrest and detention.
- 3) Write the kind of Writs for the order preventing a subordinate court from exceeding its jurisdiction.
- 4) Name any two awards that are conferred by the government upon people for their distinguished contribution in different fields.

**B) Answer the following questions in Brief: (Any 2) 4**

- 1) Why is it prohibited to employ children under 14 years of age in hazardous places?
- 2) Why has the Constitution given equal rights to all Indian citizens?
- 3) What is meant by Right to Constitutional Remedies?

**DEPARTMENT OF EDUCATION, SANGLI MISSION SOCIETY  
ANNUAL EXAM 2019 – 20**

**STD : VII**

**MATHEMATICS**

**MARKS: 50**

**Q.I ) Solve (any 4)**

**(4)**

- 1) Express the following percent as ratio  $15\frac{1}{2}\%$ .
- 2) Add the following :-  $(7x - 8y)$  and  $(8y - 3x)$
- 3) Solve :-  $\frac{x}{5} + 6 = 7$
- 4) Find the value of  $x$  :-  $7 : 14 :: 15 : x$
- 5) Find the interest earned on the following :- ₹ 900 at 8% per annum for 2 years.

**Q.II ) Solve (any 5)**

**(10)**

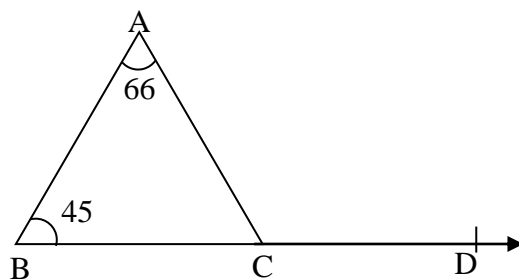
- 1) In a right angled  $\Delta$  the acute angles are in the ratio of 3 : 7. Find the measures of acute angles.
- 2) What rate gives ₹ 384 as interest on a sum of ₹ 3200 in 3 years.
- 3) Construct  $\Delta PQR$  in which  $QR = 7\text{cm}$ ,  $\angle Q = 60^\circ$  and  $\angle R = 45^\circ$ .
- 4) Find the value of 75% of 2Kg.
- 5) Find C.P when S.P = ₹1,800 and Loss = ₹ 325
- 6) Solve :-  $2m + 7 = 13$

**Q.III ) Solve (any 5)**

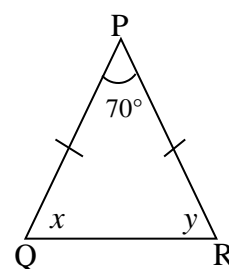
**(15)**

- 1) Find the  $m\angle ACD$  and  $m\angle ACB$

From the following figure.



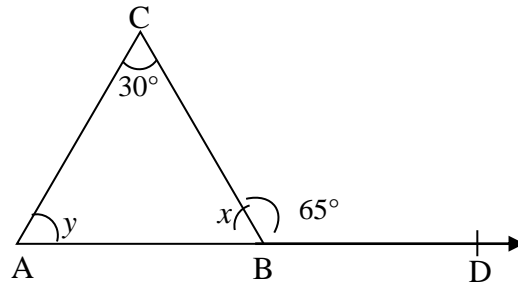
- 2) Find the value of  $x$  &  $y$  in the foll fig.



- 3) 25% of the workers in a factory are females and the number of male workers is 360. Find the total number of workers in the factory.
- 4) If  $a = 3$  and  $b = -1$ . Find the value of :-  $a^2 + 2b^2 - 4$ .
- 5) Sunita bought a calculator for ₹ 325. She sold it to Geeta at 12% profit. Find the S.P of the calculator.
- 6) Solve the foll equation. :  $3(x + 2) - 2(x - 1) = 7$

**Q.IV ) Solve (any 4)****(16)**

- 1) The price of 3 pens or 5 pencils is ₹ 15. Find the price of 4 pens and 3 pencils.
- 2) In the figure, find the measure of  $x$  and  $y$ .



- 3) A merchant bought 15 dozen pens at ₹10 per dozen. He sold them at ₹ 1.50 each. Find it's profit or loss percent.
- 4) If  $A = 3x^2 - 7x - 8$ ,  $B = x^2 + 8x - 3$ ,  $C = -5x^2 - 3x + 2$   
Find  $B + C - A$ .
- 5) A team won 5 games and loss 3 games.  
What is the ratio of :-  
i) The games won to the games played.  
ii) The games lost to the games won.

**Q.V) Complete the following table.****(05)**

Percent	Fraction	Decimal	Ratio
20 %	<input type="text"/>	<input type="text"/>	<input type="text"/>
<input type="text"/>	<input type="text"/>	0.4	<input type="text"/>

\*\*\*\*\*

**DEPARTMENT OF EDUCATION, SANGLI MISSION SOCIETY  
ANNUAL EXAM 2019 – 20**

**STD : VII**

**GEOGRAPHY**

**MARKS: 20**

**Q.I.A. Complete the statements using correct options. [2m]**

1. In which of the following type of farming are the crops rotated. \_\_\_\_\_  
a. Intensive            b. Commercial      c. Plantation
2. The apparent movement of the sun means \_\_\_\_\_  
a. The sun revolves around the earth in a year.  
b. It appears that the sun moves to the north or south in a year.  
c. The earth keeps on changing its position.
3. Another word for fish farming is \_\_\_\_\_  
a. Sericulture            b. Pisciculture      c. Nursery
4. ----- settlements flourish due to religious reasons.  
a. Nucleated              b. Scattered          c. Linear

**Q.I.B. Give geographical reasons (any 2). [4m]**

1. Agriculture in India is Seasonal in Nature.
2. Vegetation is short lived in the Tundra region.
3. Rice is the staple diet of the people from Konkan.

**Q.II.A. Answer the following question (any 3). [6m]**

1. What leads to the occurrence of seasons?
2. Describe the characteristics of Plantation Farming?
3. Describe the importance of irrigation for agriculture?
4. Differentiate between nucleated and scattered settlements.

**Q.II.B. Write Short notes on (any2). [4m]**

1. Soil degradation
2. Agrotourism
3. Organic manures

**Q.III.A. Complete the following table. [2m]**

**Q.III.B. Draw a diagram . [2m.]**

“EQUINOX DAYS “

Action	Effect	Result
Litter is burnt in the farm		
	Wind speed decreased	

\*\*\*\*\*

**DEPARTMENT OF EDUCATION, SANGLI MISSION SOCIETY  
ANNUAL EXAM 2019 – 20**

**STD : VII**

**ENGLISH – I**

**MARKS: 50**

**QI] Read the given extract and answer the following question . [7]**

“When I heard that the assistant worked for half the wages, I became suspicious. Using Mr Wilson’s description of his assistant, I made enquiries. I found that he was the criminal Clay. Why was he working in Mr Wilson’s shop ? And his habit of going into the cellar every now and then ! I inferred that he must be digging a tunnel to some other building. When we visited the shop, I beat upon the pavement with my stick to find out whether the cellar stretched out in front or behind. It was not in front. I saw the bank on the other side of the house and guessed what the criminals had in mind. When Clay answered the bell, the knees of his trousers were wrinkled and stained! It confirmed my suspicion that he was digging. You know the rest of the story. “You reasoned it out beautifully!” I exclaimed in admiration.

**Questions:**

1. How did Holmes find out that the assistant was a criminal ? [1]
2. Find one example of Interrogative sentence from the extract [1]
3. I found that he was the criminal Clay.(Add question tag ) [1]
4. You know the rest of the story .(Identify and underline one noun and one pronoun) [1]
5. concluded.(Find synonym of the word from the passage) [1]
6. How did Holmes guess that he was digging a tunnel ? [2]

**QII] Do as directed [5]**

1. Jesus had actually visited Papa Panav only once on Christmas Eve.(Correct the following sentence and rewrite it)
2. (a) ne’er (b)thro (Write long form of given words)
3. less (Write two words with the given suffix)
4. Mrs.Menon called her baby Dolly.(Underline the object complements)
5. The minister \_\_\_\_\_ his personal body-guards.(Insert correct form of the phrase ‘to escort’ in the blank)

**QIII]A. Write the meanings of: (any 5) [5]**

1. hunk    2. session    3. strand    4. mocking
5. veracity    6. flapping    7.Taal kacheri

**B. Make meaningful sentences with : [4]**

1. believe in    2. lot of money    3.at the beginning    4.let the others

**C. Name figure of speech . [3]**

1. Be it ever so humble, there’s no place like home;
2. And pleased with what he gets.
3. For men may come and men may go,

**QIV]A. Make adjectives of: (1) believe (2) wish (3) courage [3]**

**B. Write antonyms of: (1) lent (2) departed (3) frequent [3]**

**C. Write homophones of: (1) went (2) pair (3) soul [3]**

**QV]A. Answer the following in one sentence each . [6]**

1. In what forms did Papa Panav imagine Jesus to visit him ?
2. What does the poet hope for in the poem ‘Home Sweet Home’ ?
3. Who were the two criminals ?
4. Who is the speaker in the poem ‘The Brook’?
5. What dangers were likely to befall the young crow ?
6. Explain the meaning of ‘Harsh words are like scattered bits of paper carried away by the wind’.

**B. Answer the following in brief .(any 3) [6]**

1. Write about the daily routine of the ‘Lord of Tartary’ in short .
2. Write a character sketch of Papa Panav in your own words .



3. In which professions is a person forced to stay away from his home/homeland for a long time? Try to guess why the poet is forced to stay away from his home ?

4. Why did Mr Wilson accept the job ?

**QVI] Write a personal letter of thank to an elder person .**

**[5]**

\*\*\*\*\*

**DEPARTMENT OF EDUCATION, SANGLI MISSION SOCIETY  
ANNUAL EXAM 2019 – 20**

**STD : VII**

**ENGLISH – II**

**MARKS: 50**

**Q 1] A) State if the underlined words in each sentence are a phrase or a clause: (5)**

1. We heard of his success.
2. He arrived when it was morning.
3. At sunset they returned home.
4. You may sit wherever you like.
5. The man with a cap is my uncle.

**B) Fill in the blanks with suitable link words (who/how/what/which/why) (5)**

1. Show me \_\_\_\_\_ this machine works.
2. Can you tell me \_\_\_\_\_ you are always late?
3. I don't know \_\_\_\_\_ she is talking to.
4. Tell the librarian \_\_\_\_\_ book you are taking.
5. I told her \_\_\_\_\_ time the show would begin.

**C) Rewrite each sentence in the passive voice: (5)**

1. Did Columbus discover America?
2. They have invited me to lunch tomorrow.
3. Who has plucked the flowers?
4. God loves all men.
5. The doctor is examining the patient.

**Q 2] A) Rewrite in Reported speech (5)**

1. She said to me, "Please lend me some money."
2. I said to him, " My father left for Delhi yesterday."
3. I said to her, " Is it raining outside?"
4. He said, "Truth always wins."
5. Misha said, " I am enjoying my music lessons."

**B) Rewrite each sentence with a negative verb: (5)**

1. I can find my shoes nowhere.
2. There was nothing for us to eat.
3. My friends have done nothing for me.
4. We sent nobody to her house.
5. I'll tell this secret to nobody.

**C) Choose the correct alternative for each blank: (5)**

1. \_\_\_\_\_ (None / None of) my friends came to the party.
2. \_\_\_\_\_ (Most / Most of) children like playing.
3. I don't like \_\_\_\_\_ (any / any of) these posters.
4. He's lost \_\_\_\_\_ (some / some of) his money.
5. \_\_\_\_\_ (Most / Most of) the shops remain closed on Sunday.

**Q 3] A) Complete the sentences with (much / many/ little/ few) : (5)**

1. I am new to this town. I don't know \_\_\_\_\_ people here.
2. I was hungry but there was \_\_\_\_\_ food in the fridge.
3. Nidhi went out a \_\_\_\_\_ minutes ago.
4. We must hurry. We haven't got \_\_\_\_\_ time.
5. It didn't rain this year. There's not \_\_\_\_\_ water in the river.

**B) Correct the sentences: (5)**

1. He is working hardly for his exam.
2. A fast runner can run fastly.
3. Don't eat so quick.
4. She is a good singer, she sings good.
5. You're driving dangerous. You can have an accident.

**C) Put the words in the right order: (5)**

1. (didn't go / yesterday / Rishi / to school).
2. (at the hotel / we / very late / arrived).

3. (a beautiful bird / I saw / this morning / in the garden).
4. (We / since 1990 / here / have lived).
5. (I had / in bed / this morning / my breakfast).

**Q.4. Read the following passage and answer the questions given below -(5)**

*Proper collection and destruction of solid waste is very important for the overall health of urban citizens. Indian cities generate about 80,000 tons of solid waste everyday. It is very hard that none of the cities in the country collects and destroys its waste in safe way. About 60% of India's solid waste consist of biodegradable organic wastes. It originates from kitchens and markets. By using earthworms this solid waste can be turned into rich organic manure. This is an eco-friendly way of making manure.*

*Earthworms play a key role in soil biology by serving as natural agent. They convert organic waste into valuable organic manure. Earthworms improve the soil texture and soil aeration. They enrich the soil with nutrients. They promote useful soil required for plant growth.*

1. Fill in the blanks with correct words from the passage : 2
  - 1 Disposal of solid waste is important for .....
  - 2 Indian cities produce about ..... tons of waste.
  - 3 Earthworms are ..... bioreactors.
  - 4 ..... Percent of solid waste is biodegradable.
2. Answer the following : 2
  - 1 Who plays a key role in soil biology ?
  - 2 From where does the biodegradable organic waste originate in India ?
  - 3 Give suitable title to the above passage - 1

\*\*\*\*\*

# सांगली मिशन सोसायटी शिक्षण मंडळ

द्वितीय सत्रात परीक्षा - २०१९-२०

रोल न.

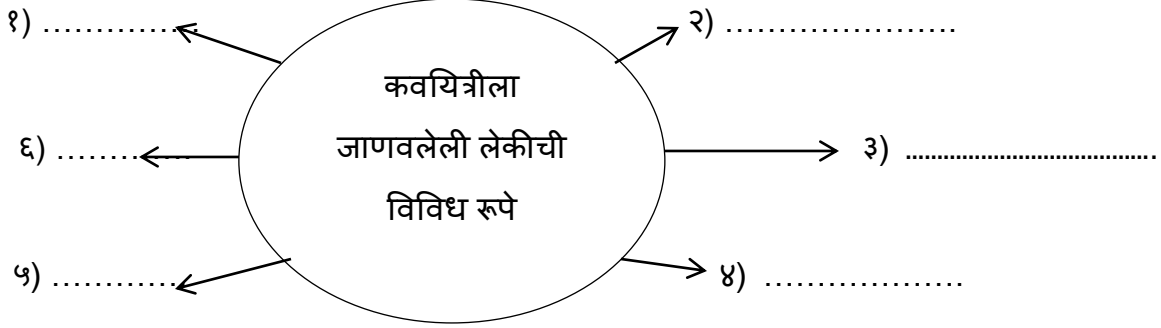
इयत्ता 7 वी

विषय : मराठी

गुण: 50

प्र 1. पुढील आकृत्या पूर्ण करा.

[२]




२) चवीचे प्रकार → १) ..... २) ..... ३) .....

[२]

३)

अमृत व इसाब यांच्यामध्ये सारख्या असणाऱ्या गोष्टी

[२]



आ] एका वाक्यात उत्तरे लिहा.

[३]

१. कवितेतील लेक केंव्हा रुसून बसते ?
२. सोनालीच्या घरातील सर्वांना तिच्याकडे पाहून नवल का वाटत आहे?
३. पंडिता रमाबाईच्या मुलीचे नाव काय होते?

इ] खालील प्रश्नांची थोडक्यात उत्तरे लिहा [ कोणतेही तीन]

[६]

१. पंडिता रमाबाईंनी हंटर कमिशनकडे कोणती शिफारस केली?
२. वैष्णवीचा वाढदिवस कशाप्रकारे साजरा झाला?
३. तुमच्या मते खरी मैत्री कशी असते?
४. सोनालीला आता 'पुस्तके वाचत जा', असे सांगण्याची गरज उरली नाही?
५. रोजनिशी का लिहावी? रोजनिशी लिहिण्याने काय फायदा होईल, असे तुम्हाला वाटते?

प्र २. अ] का ते लिहा .

[३]

१. वैष्णवीला गहिवरून आले .
२. आईने सोनालीला कथेचा सारांश लिहायला सांगितला.

आ] कोण कोणास म्हणाले.

[२]

१. "अरे, तुम्ही दोघे कुस्ती का नाही लढत ?"
२. 'मी पुन्हा एकदा पुस्तक वाचते.'

इ] खालील कवितेच्या ओळींचा अर्थ स्पष्ट करा.

[४]

१. ऐसे कैसे झाले भौंदू | कर्म करोनि म्हणती साधू  
अंगा लावुनिया राख | डोळे झाकुनि करति 'पाप |
२. फक्त लेकीला कळते, अरे निसर्गाची भाषा  
काळ्या रात्रीला लागते, कशी सकाळची आशा .

प्र ३. अ] समानार्थी शब्द लिहा

[२]

१. दिवस
२. गृह
३. कल्याण
४. झाड

आ] विरुद्धार्थी शब्द लिहा .

[२]

१. वक्ता
२. विधवा
३. विस्मरण
४. अंध

इ] लिंग बदल [२]

१. आजी २. मित्र ३. सासू ४. विदुषी

ई] वचन बदल [२]

१. समई २. लेक ३. भाषा ४. पाकळ्या

उ] गटातील अचूक शब्द लिहा [२]

१. १. सांस्कृतीक २. सांस्कृतिक ३) संस्कृन्तिक  
२. १. भूर्डमुग २. भूर्डमूग ३. भूर्डमुग

ऊ] पुढील शब्दात लपलेले चार अर्थपूर्ण शब्द शोधा. [२]

१. आराखडा २. सुधारक

ए] पुढील वाक्यांत कंसातील योग्य वाक्यप्रचार लिहा. [२]

१. घरी आलेल्या पाहुण्यांना बाबांनी राहण्यासाठी ..... ( गळ घातली, भुरळ घातली )  
२. त्याची करून कहाणी ऐकून सर्वांची मने ..... (हेलावून गेली, हबकून गेली )

ऐ] कंसात दिलेल्या अव्ययांचा योग्य वापर करून रिकाम्या जागा पूर्ण करा. [२]

[ परंतु , आणि , शी!, अबब! ]

१. मंगल खंजिरी -----टाळा छान वाजवते.  
२. ....! मला गबाळेपणा अजिबात आवडत नाही .

प्र ४ निबंध लेखन [ कोणताही एक ] [५]

१. मोबाईल कायमचे बंद झाले तर .....

कमी लोकांकडे फोन , मोबाईल वापरण्याची सवय , मोबाईल बंद झाला तर ,सगळीकडे शांतता , सेल्फी बंद , निरोप मिळणार नाहीत , दूर राहणाऱ्यांशी बोलणे बंद , गेम्स, गाणी , फोटो,घड्याळ बंद .

२) वणवा लागलेल्या जंगलाचे मनोगत

हिरवीगार झाडे , आनंदी वातावरण , पक्षी फडफडणे , गरम ज्वाला , प्राणी, पक्षी, जळणे , जंगलात -- निर्धास्तपणे , वणवे लावणे , वणवा विझवणे , जळणे , शांत होणे .

३.) माझा आवडता नेता

( नाव .... केलेलं कार्य.....समाजसेवा ..... संदेश )

प्र.५. पत्रलेखन [५]

तुमच्या मोठ्या भावाला वाढदिवसानिमित्त शुभेच्या देणारे पत्र लिहा.

किंवा

मे महिन्याच्या सुट्टीला तुमच्या मित्राला / मैत्रिणीला निमंत्रण देणारे पत्र लिहा .

# सांगली मिशन सोसायटी शिक्षण मंडळ

द्वितीय सत्रात परीक्षा - २०१९-२०

रोल न.

इयत्ता 7 वी

विषय : हिंदी

अंक : 50

प्र. अ) निम्नलिखित वाक्यों में रिक्त शतानो की पूर्ति करो: [२]

१. हिंदी के ..... शब्द हैं ।
२. गुन--- गुन---- गुन---- गुन गूजे .....
३. वे दोनों रात होने का ..... करने लगे ।

ब) निम्नलिखित वाक्य किसने किससे कहे हैं। [२]

१. सबको क्षमा किया जाता है ।
२. तुम्हारे चित्रों में सचमुच बहुत कमियाँ हैं ।
३. हम तुम्हें कड़ी से कड़ी सजा देंगे ।

क) निम्नलिखित प्रश्नों के उत्तर एक वाक्यों में लिखिए । [४]

१. मामाजी ने कैमरा के बारे में क्या बताया ?
२. मोर और कोयल क्या करते हैं?
३. बादशाह अकबर के दरबार में कितने मंत्री थे? उन्हें क्या कहा जाता है?
४. कवि ने मन में क्या ठाना है?

ड) निम्नलिखित सही पर्याय चुनकर वाक्य फिरसे लिखो [२]

१. कुछ शब्द ऐसे होते हैं ; जो औरो से .....
- अ) मित्रता नहीं कर पाते। ब) शत्रुता नहीं कर पाते । क) घुलमिल जाते हैं.
२. इन डाकुओं के गिरोह ने कई वर्षों से .....
- अ) बहुत पैसा जमा कर रखा था। ब) बहुत उत्पात मचा रखा था। क) बहुत सी चोरियाँ की थी ।

प्र.२ अ) निम्नलिखित प्रश्नों के उत्तर ३/४ वाक्यों में लिखो [९]

१. नैतिक मूल्यों की सूची बनाओ ।
२. भाषा समृद्ध कैसी होती है?
३. चित्रकार की पत्नी ने उसे क्या सलाह दी?
४. वसंत ऋतु में प्रकृति में क्या क्या परिवर्तन होते हैं। कविता के आधार पर लिखो?
५. शब्दों के बारे में लेखक के विचार बताओ?

आ] निम्नलिखित कविता की पंक्तियों का अर्थ लिखिए : [४]

१. धर्म अलग हों, जाति अलग हों, वर्ण अलग हों , भाषाएँ  
पर्वत , सागर तट, वन मरुस्थल ; मैदानोंसे हम आएँ
२. अब कोई ना अढ़पढ़ होगा , सबके हाथों में पुस्तक होगी ।  
ज्ञानगंगा की पावनधारा , सबके आंगन तक पहुंचेगी ।

प्र.३. अ] समानार्थी शब्द लिखो : [९]

१. सुगंध
२. निद्रा

ब] विरुद्धार्थी शब्द लिखो : [९]

१. दुर्लभ
२. गुण

क] वचन बदलो : [९]

१. मिठाई
२. कली

- ड] लिंग बदलो : [१]  
 १. चूहा २. बादशाह
- इ] निम्नलिखित किन्ही दो मुहावरोंका अर्थ लिखकर वाक्या में प्रयोग करो. [२]  
 १. गला फाड़कर रोना २. सीना तानकर चलना ३. करवटें बदलना
- प्र ३ आ] निम्नलिखित वाक्योंमें प्रयुक्त अव्यय रेखांकित करके नाम लिखो । [२]  
 १. अरेरे ! पेड़ गिर पड़ा ।  
 २. मेरा गाँव यहाँ बसा है।
- उ] निम्नलिखित दिए गए वाक्यं में से काल पहचानो ? [२]  
 १. खेल तो ग्रामीण जीवन की आत्मा हैं।  
 २. जलाशय चाँदी की भाँती चमचमा रहा था ।
- ऊ] निम्नलिखित दिए गए वाक्यों का नाम लिखो। [२]  
 १) सदैव सत्य के पथ पर चलो।  
 २) खूब पढ़ो , खूब बढ़ो ।
- ए) निम्नलिखित कारकों अपने शब्दों में प्रयोग करके वाक्य लिखो। [२]  
 १) के लिए २) पर
- प्र.४ अ] निम्नलिखित रूपरेखा के आधारपर कहानी लिखो ( शीर्षक , तात्पर्य आवश्यक ) [४]  
 एक बूढ़ा किसान --- तीन अलसी लड़के-- किसान का लडकों को बुलाना -- "अपने खेत में एक खजाना गड़ा हुआ है" । किसान की मृत्यु – लड़कों का सारा खेत खोद डालना --- वर्षा ---अच्छी फसल --- लडकों को हर साल खजाना मिलना ---बोध।
- आ) किन्ही एक विषयपर निबंध लिखो। [५]  
 १. सौरमंडल  
 २. अस्पताल में एक घंटा  
 ३. अंधविश्वास
- ई] निम्नलिखित परिच्छेद पढ़कर दिए गए प्रश्नो का उत्तर लिखो। [४]  
 स्त्रियों की शिक्षा का स्वरूप पुरुषों की शिक्षा के स्वरूप से अलग रहना चाहिए । कटाई, बुनाई, सिलाई, कटाई आदि की शिक्षा तो उन्हें दी ही जाए , किन्तु इसी के साथ उन्हें कुटीर उद्योगों में भी निपुण बनाया जाना चाहिए, जिससे की बुरा समय आने पर वे किसी की मोहताज न रहें । स्त्रियोंको शिक्षित करने से हमारा घर स्वर्ग बन सकता है।नासमज और फूहड़ औरतों से परिवार- के -परिवार तबाह हो जाते हैं । जिन घरों की स्त्रियाँ सुशिक्षित और सुसंस्कृत होती हैं, वे घर जिन्दा विश्वविद्यालय होते हैं। शिक्षा का अर्थ किताबी ज्ञान ही नहीं है और न ही अक्षरज्ञान है, वह तो जीने की कला है।
- १) स्त्रियों को किस प्रकार की शिक्षा देनी चाहिए ? [१]  
 २) हमारा घर स्वर्ग कब बन सकता है? [१]  
 ३) जिन्दा विश्वविद्यालय किसे कहाँ गया है? [१]  
 ४) शिक्षा का अर्थ क्या है? [१]