

**DEPARTMENT OF EDUCATION, SANGLI MISSION SOCIETY
ANNUAL EXAM 2019 – 20**

STD : VI

HISTORY & CIVICS

MARKS: 24

Q1.a) Fill in Blanks with appropriate words **[2]**

1. _____ near Mumbai was an important sea-port in the ancient times
(Vasai, Nalasapara, Wadala.)
2. The iron pillar at Mehrauli near Delhi still remains.
(frast free, dust free, rustfree)

b) Match the following **[2]**

Group A

1. Bhagvad Gita
2. Mahabharata
3. Charka Samhita
4. Rasaratnakara

Group" B'

- a) An epic
- b) A work on Clinical Diagnosis
- c) Siddha Nagarjun
- d) A scared text of the Hindus

c) Name the following **[2]**

1. A new style of art that emerged during the Kushana period in India.
2. The Kings who started the minting of gold coins in India.

Q2.a) Answer the following in one sentence **[4]**

1. What were the occupations of the people during the Maurya period?
2. Name the ancient dynasties of Southern India.
3. Write any two ancient Indian Universities?
4. Which city was established by Kanishka in Kashmir ?

b) Answer the following question in brief **[6]**

1. What is meant by 'Tri-Samudra-toya peet -vahana' ?
2. What is meant by the Bhagwad Gita ?
3. Write a short note on 'The SilkRoute'?
4. Why did Emperor Ashoka Decide never to wage war again ?

CIVICS

Q3.a) Fill in the blanks **[2]**

1. The first city in Maharashtra to have a Municipal Corporation _____.
2. The _____ looks after the local Administration of the village ?

b) Answer the following question in one sentences : **[2]**

1. Who heads District Administration ?
2. Which court is at the apex of the judiciary?

Q4. Answer the following question in brief . **[4]**

1. What problems do people face in cities ?
2. Write a Short-note on Disater Management ?
3. Where does the Nagar Panchayat Functions?

**DEPARTMENT OF EDUCATION, SANGLI MISSION SOCIETY
ANNUAL EXAM 2019 – 20**

STD : VI

MATHEMATICS

MARKS: 40

Q1.A. Choose the correct answer

[5m]

1. Express $\frac{2}{5}$ as a decimal _____
a) 0.5 b) 0.4 c) 0.6 d) 0.7
2. The length and breadth of a rectangle are 11 cm and 9 cm. Find its area _____
a) 90 sq cm b) 100 sq cm c) 19 sq cm d) 99 sq cm
3. Which one of the following triangles is not symmetrical triangle?
a) Isosceles b) equilateral c) scalene d) none of these
4. Five hundreds, 3 tenths is written as _____
a) 5.3 b) 50.3 c) 50.03 d) 500.3
5. The ratio 35: 84 in the simplest form is _____
a) 5:7 b) 7:12 c) 5:12 d) None

B. Write true or false

[3m]

1. Both the diagonals of a rhombus are equal in length.
2. Area of a surface is measured in square units of length.
3. A pentagon can be divided into 3 triangles.

C. Match the following with the number of faces

[2m]


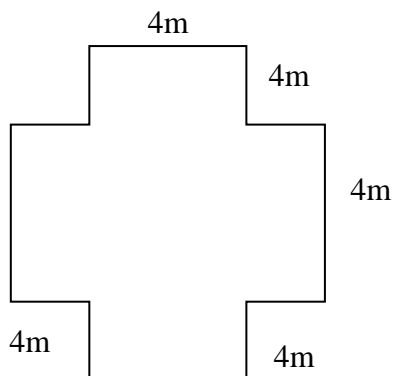
- | | |
|-----------------------|-------|
| 1. Cuboids | a) 12 |
| 2. Triangular pyramid | b) 3 |
| 3. Cylinder | c) 6 |
| 4. Triangular prism | d) 4 |
| | e) 5 |

Q2.A. Solve the activity

[4m]

a) Find the perimeter of the following figure

b) Name the figure and write the number of vertices, edges, faces



P.T.O.

B. Solve [Any 5]**[10m]**

1. Complete the table using the given formula $y = 4x + 1$

x	3	4	5	6
y				

2. Find the area of a square whose one side is 75m.
3. Draw a line segment of length 8.6 cm and construct its perpendicular bisector.
4. Express using variables 1) Twice a number divided by 3 gives 15.
2) Four times a number increased by 4 gives 36.
5. Find “x” in the following proportion $x : 3 :: 57 : 19$
6. Write as fraction in lowest term a) 3.25 b) 0.04

Q.3. Solve [Any 4]**[12m]**

1. Divide ₹150 between Abhishek and Akhil in the ratio 3 : 7.
2. 15 boys can type 270 pages a day. How many pages a day can 36 boy’s type?
3. Draw angle of 150° and divide into four equal parts.
4. Using a ruler and compasses construct an angle of 45° .
5. Draw and define triangles based on sides.

Q4.Solve [Any 1]**[4m]**

1. A tile is a square of side 30 cm. How many such tiles would be required to cover the floor of a square room of side 6 cm.
2. Draw a circle of radius 3.4 cm. Draw any two of its chords. Construct the perpendicular bisector of these chords .Where do they meet?

**DEPARTMENT OF EDUCATION, SANGLI MISSION SOCIETY
ANNUAL EXAM 2019 – 20**

STD : VI

GEOGRAPHY

MARKS: 16

Q.I.A. Fill in the blanks. [2]

1. In the tropical areas, we mainly see ____ occupations.
2. The generation of _____ depends on the intensity of sunrays.
3. The proportion of land on earth is _____
4. The _____ is Agra is built in marble.

Q.I.B. Give geographical reasons. (Any 2) [4]

1. It is necessary to conserve the natural resources.
2. The type of occupation determines a person's income.
3. It is economic to carry out transport by waterways.

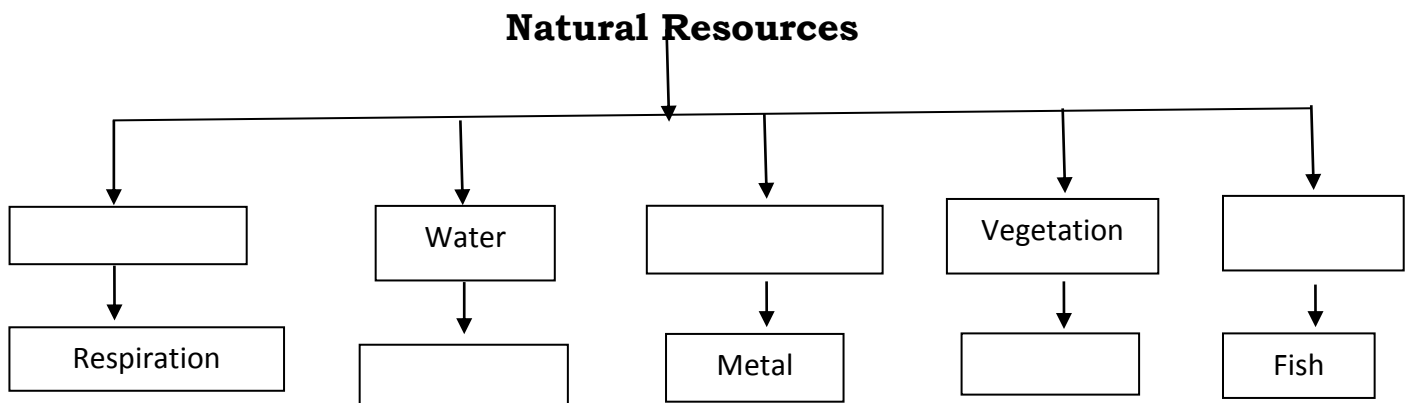
Q.II.B. Answer the following in one sentence. [2]

1. Name the Substance based energy resources?
2. What are the uses of minerals?

Q.III.A. Find the difference between (any1) [2]

1. Igneous and Metamorphic rocks.
2. Mineral oil and solar energy
(availability, environment-friendliness)

Q.III.B Complete the flow chart. [2]



**DEPARTMENT OF EDUCATION, SANGLI MISSION SOCIETY
ANNUAL EXAM 2019 – 20**

STD : VI

SCIENCE

MARKS: 40

Q1.A Fill in the blanks [4m]

1. Motion of a needle of a sewing machine is _____
2. _____ is a natural magnet
3. The process of changing water to vapour is called _____
4. Aquatic animals use dissolved air in water for _____

B. Match the following [2m]

- | | |
|------------------|-----------------------------------|
| 1. Transpiration | a) conversion water into vapour |
| 2. Evaporation | b) no rainfall |
| 3. Condensation | c) loss of water by plants |
| 4. Drought | d) conversion of vapour to liquid |

C. Write true or false [3m]

1. Repulsion is a sure test of magnetism.
2. When a fused bulb is connected with a circuit it glows.
3. Nitrogen is the major constituents of air.

Q.2.A. Name the following [3m]

1. Two methods by which a magnet can be demagnetised.
2. Examples of random motion
3. Plants found on mountains

B. Define [any 4] [4m]

- | | |
|--------------------------|-----------------|
| 1. Conservation of water | 2. Stimuli |
| 3. Demagnetized | 4. Non-luminous |
| 5. Vermicomposting | |

Q.3.A. Answer in one sentence [any 5] [5m]

1. Mention the two main function of water for living organisms?
2. What is the composition of air?
3. Give two examples of periodic motion?
4. What is reflection of light?
5. Write any two properties of magnet?

B. Distinguish between [4m]

1. Magnetic and non magnetic materials
2. Umbra and penumbra

Q.4.A. Answer in brief [any 4] [6m]

1. Write the different types of motion with examples?
2. How is a compass used to find directions?
3. How are clouds formed?
4. How do plants and animals help each other in the exchange of gases?
5. How does heavy rain affect us?

B. Give reasons [any 3] [6m]

1. Why the bulb does not glow when an eraser is used instead of safety pin?
2. Why is carbon dioxide gas used to extinguish fire?

3. Why does a lump of cotton or wool shrink in water?
4. Why speed is important for survival in grassland for animals that live there?

Q.5. Draw a neat and labeled diagram of water cycle [3m]

**DEPARTMENT OF EDUCATION, SANGLI MISSION SOCIETY
ANNUAL EXAM 2019 – 20**

STD : VI

GENERAL KNOWLEDGE

MARKS: 25

Q1. Fill in the blanks.

[5]

- 1) Kabul is the capital of _____ and its currency is Afghan Afghani.
- 2) Global warming is due to release of _____ gases.
- 3) Riyadh is the capital of Saudi Arabia and the currency is _____.
- 4) India became a member of United Nations on _____.
- 5) _____ is the capital of France and its currency is Forint.

Q2. Match the following

[5]

Group A

Group B

- | | |
|---|--|
| <ol style="list-style-type: none">1) Corsica2) Kilimanjaro3) Blue mountains4) Gift of Nile5) Land of Lilies | <ol style="list-style-type: none">a) Franceb) Egyptc) Base unit of volumed) Highest mountain in Africae) Nilgiri Hills |
|---|--|

Q3. Write True or False

[5]

- 1) Frigate bird is the fastest bird.
- 2) Stone fish is the most dangerous fish.
- 3) The social group of lions is called pack
- 4) Jupiter is the farthest planet from the Earth
- 5) Bharatanatyam is a dance of Odisha.

Q4. Write in one word

[5]

- 1) One who believes in fate
- 2) The classical dance from Kerala.
- 3) First woman to become a Prime Minister .
- 4) The oldest mountain range in the world.
- 5) Konkani speaking people belong to.

Q5. Identify the picture and write names

[5]


1.



2.



3.



4.



5.



**DEPARTMENT OF EDUCATION, SANGLI MISSION SOCIETY
ANNUAL EXAM 2019 – 20**

STD : VI

ENGLISH – I

MARKS: 40

Q.1.A. Read the following passage and answer the questions given below: **8**

Gautama Buddha was born over two thousand five hundred years ago, as Prince Siddharth. He was the son of a king – Raja Shuddhodana. He was born on the sacred day of Vaishakh Purnima at Lumbini, situated near the city of Kapilavastu. Seven days after his birth, his mother Mayadevi passed away. It was prophesied at his birth that the infant would grow to be either a great Chakravarti (an Emperor) or a sanyasi (a renunciate) who would bring comfort to thousands of lost souls.

The king was determined to prevent his beloved son from renouncing the world. He surrounded the Prince with every imaginable luxury and comfort. It is said that the King had three magnificent palaces, one for each season of the year, and in the beautiful atmosphere of these royal mansions, Prince Siddharth lived his secluded, protected life.

1. Where was Gautam Buddha born? 1
2. What was the real name of Gautam Buddha? 1
3. Find the word from the passage which means the following: 2
 - a) Located
 - b) New born baby
4. Gautama Buddha was born over two thousand five hundred years ago. (Frame a 'Wh' question to which the underlined part is the answer) 1
5. Write from the passage the opposites of : 1
 - a) small
 - b) hut
6. Explain Prince Siddharth's protected life in short? 2

Q.1.B. Quote the given lines from the Poem 'Autumn': **4**

"Come, little
.....
..... days grow cold."

Q.2.A. Write the meanings of the following words: (any 4) **4**

1. ajar
2. feeble
3. gallop
4. Archbishop
5. meadow
6. inscription

Q.2.B. Make meaningful sentences from the given phrases: **4**

1. worth seeing
2. assorted
3. awesome
4. expensive

- Q.2.C. Who said the following to whom:** **2**
1. "Your hair wants cutting."
 2. "Lord please accept my offering of milk and rice."
- Q.2.D. Write the noun forms of:** **3**
1. Wearily
 2. Cautiously
 3. Bright
 4. Interrupted
 5. Wasting
 6. Contemptuously
- Q.3. Answer the following questions in one sentence:** **5**
1. Who was Sushruta?
 2. Why is the toll booth called the 'Phantom' toll booth?
 3. Who misses all the fun in the poem 'It Can Be Done' ?
 4. Which is the wettest place on the earth?
 5. How did Sir Ector show his respect to Arthur?
- Q.4. Answer the following questions in brief: (any 3)** **6**
1. Write the characteristics of Mr. Nobody?
 2. Write what you would like to do if 'Time' was your friend.
 3. What themes did the Committee identify?
 4. Why did Sir Kay send Arthur home?
- Q.5. Write short notes on: (any 2)** **4**
1. Prince Siddharth's protected life
 2. Antonio
 3. King Uther

* * * * *

DEPARTMENT OF EDUCATION, SANGLI MISSION SOCIETY

ANNUAL EXAM 2019 – 20

STD : VI

ENGLISH – II

MARKS: 50

Q.1.A) Write each sentence in the Present Perfect Continuous form: 5

1. He (learn) English for ten years, but can't write correctly.
2. She has a headache because she (read) too long.
3. I (stand) here in the rain for half an hour.
4. She hasn't come to see us since we (live) in this house.
5. He (work) in this factory for twenty years.

B) Rewrite each imperative, placing the particle after the object: 5

1. Take away these books!
2. Turn on the TV set!
3. Eat up your dinner.
4. Read out the order to the students!
5. Put down your pens.

C) Rewrite the sentences using 'Should' in place of 'Ought to': 5

1. You oughtn't to inform your father.
2. We ought to grow more trees.
3. Ought we to kill wild animals?
4. We oughtn't to kill wild animals.
5. Ought you to inform your father?

Q.2 A) Make questions with 'Who' or 'What' to get the underlined subject as the answer: 5

1. Reading good books makes us wise.
2. The Postman is coming there.
3. The teacher has checked our answer books.
4. Indu has taken your umbrella.
5. Some boys broke the window

B) Choose the correct verb for each sentence: 5

1. (Do/Does) your friend visit you daily?
2. Can we (has/have) coffee instead of tea?
3. Doesn't Chennai (has/have) a hot summer?
4. Neither Sita nor Gita (is/are) in the class today.
5. The furniture (is/are) for sale.

C) Write in 'If' or 'When': 5

1. ___ you get home in the evening, I shall ring you up.
2. ___ I finish my homework, I shall go out to play.
3. We shall start at once ___ she reaches here.
4. You'll have the right to vote ___ you're 18 next year.
5. Do you mind _____ I close the window.

Q.3 A) Rewrite each sentence in the Past form Verb: 5

1. If you give me your racket, I can play tennis.
2. If you sing, I'll dance.
3. If it is warm, she shall swim in the tank.
4. If she is well, she can walk to the station.
5. If you catch the thief, we'll beat him.

B) Add the missing Question word or the missing preposition: 5

1. What is butter made ____?
2. Who are you waiting ____?
3. ____ are you thinking about?
4. What year was she born ____?
5. Who is this telegram ____?

C) Add suitable Question tags to the following statements: 5

1. I am a member of the team.
2. You never used to wear a hat.
3. I needn't wait for them.
4. Let me have a book.
5. You used to love singing.

Q.4. Read the passage carefully and answer the questions given below: 5

Today, Mike and his mom are going to the library. Mike wants to find a book to read. His mom wants to use a computer there.

When they get to the library, Mike finds a book about detectives. He also finds a book with chapters about a friendly ghost. Finally, he finds a book about a man who lives in the woods without food or water. He puts the books on the front desk and waits for his mom.

Mike's mom sits at one of the computers in the library. She checks her email and looks at pictures of flowers on the internet. Then she reads a news article on a website.

Mike's mom leaves the computer and walks over to Mike, holding up something out for him. Mike looks at her quizzically. It takes him a moment to recognize what she is holding. "I got that movie for us to watch tonight," says Mike's mom. "Are you ready to leave?"

"Sure," Mike says, now holding the movie out in front of him.

Questions :

1. Where are Mike and his mother going? 1
2. Which book does Mike find in the library? 1
3. What does Mike's mother check on the computer? 1
4. Give the meaning for the following words from the passage: 1
a. An electronic device - b. Film -
5. Give a suitable title to the passage. 1

* * * *

सांगली मिशन सोसायटी शिक्षण मंडळ

द्वितीय सत्रात परीक्षा २०-२०१९ -

रोल न.

इयत्ता ६ वी

विषय : मराठी

गुण 40 :

प्र.१ अ) रिकाम्या जागा भरा. [२]

१. धुळीसंगे पालापाचोळा जाई या उंच

२. मी कामात पुरता गुरफटलो होतो म्हणून पत्र पाठवायला होत आहे .

आ) खालील वाक्य कोण कोणास म्हणाले ते लिहा . [२]

१. 'तुमच्या राज्यात फार चवदार कोबी पिकवतात असे मी ऐकले आहे.'

२. " घाबरू नकोस , हा तर खेकडा !"

इ) खालील प्रश्नांची थोडक्यात उत्तरे लिहा [कोणतेही ३] [६]

१) अप्पार्जीनी ताजी कोबी कलिंग देशाकडे कशी पाठवली?

२) "पर्यावरणाचे भान ठेऊन होळी साजरी करा " याबाबत तुमचे मत दोन -तीन वाक्यात लिहा .

३) तुम्हाला खूप तहान लागली असताना अचानक पाणपोई दिसली ,तर तुमच्या मनात कोणते विचार येतील ते लिहा .

४) चंद्रावरच्या शाळेत पास कॅव्हा केले जाते?

५) घोडामासा पाहून मिन्गूला हसू का आले?

प्र. २ अ) तुमच्या शाळेच्या पर्यावरणाचे संवर्धन करण्यासाठी तुम्ही शाळेच्या परिसरामध्ये कोणकोणते सूचनाफलक लावाल ते तयार करा. [२]

सूचना फलक

उदा

झाडांच्या फांद्या तोडू नयेत

आ) खालील कवितेच्या ओळी पूर्ण करा. [२]

होळी अली होळी

होळी अली होळी

.....

.....

.....

.....

.....

बांधू होळीसाठी मोळी

इ) कोण ते लिहा [२]

१) पाण्यात राहणारे -

२) जमिनीवर राहणारे

३) जंगलात राहणारे

४) जमीन व पाणी या दोन्ही ठिकाणी राहणारे

ई) जोड्या जुळवा [२]

'अ' गट

'ब' गट

१) कडी

एवढाच फक्त अभ्यास

२) लाकूड

नसेल पाठीवरती

३) दप्तराचे ओझे

कड्या

४) दाबायची बटणे

लाकडे

ड) खालील दिलेल्या शब्दांविषयी माहिती द्या. [२]

१. दैनिक २. साप्ताहिक ३. त्रैमासिक ४. अर्धवार्षिक

प्र.३ अ] दिलेल्या सूचनेप्रमाणे खालील वाक्यात बदल करा. [३]

१. रिमा सहलीला गेली. [भविष्यकाळ करा]

२. सुभाष माझा मित्र आहे. [भूतकाळ करा]

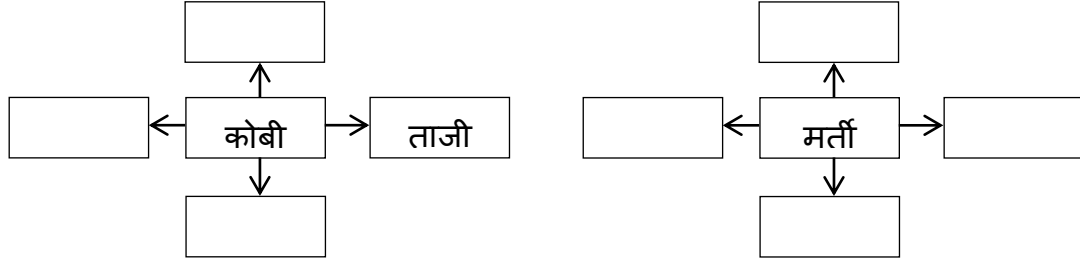
३. चंदाने लाडू खाऊन संपवला. [वर्तमानकाळ करा]

आ] खालील वाक्यांमधील काळाचा प्रकार ओळखा. [२]

१. प्रिया शाळेतून घरी अली.

२. सूर्य पूर्वेला उगवतो.

इ] खालील आकृतीत दिलेल्या शब्दांस विशेषणे लावा. [२]



ई) खालील शब्दांचे समानार्थी शब्द लिहा. [२]

१. किनारा २. आठवण ३. शेवट ४. नातेवाईक

उ) खालील शब्दांचे विरुद्धार्थी शब्द लिहा. [२]

१. महान २. सुशिक्षित ३. कोरडा ४. दुष्काळ

प्र.३ अ] खालील वाक्यप्रचार व त्यांच्या अर्थाचा जोड्या जुळवा . [२]

वाक्यप्रचार

१. कासावीस होणे

२. कैफियत मांडणे

३. पोटशूळ उठणे

४. दूषण देणे

अर्थ

दोष देणे

पोट दुखणे

व्याकुळ होणे

तक्रार करणे

ब] खालील वाक्यात विरामचिन्हे वापरून वाक्य पूर्ण करा. [२]

१. तो प्रामाणिक आहे बाबानी सांगितले

२. आवडले का तुला पुस्तक आई म्हणाली.

प्र.४. खालील मुद्द्यांच्या आधारे निबंध लिहा. [५]

१) सूर्य उगवला नाही तर ?

हा विचार मनात का व केव्हा झाला ? सूर्य उगवला नाही तर घडणार महाअनर्थसजीवांचे अस्तित्व धोक्यात आळशी माणसांची मजानिसर्गाच्या मनोहारी सौंदर्याला आपण मुकणार फळे,फुले, अन्न इत्यादी नसणारभापवह कल्पना .

अथवा

२) विमानाचे आत्मवृत्त : चिव चिव ऐकू न येणे , संख्या कमी होणे..... पूर्वी घराघरात घरटे इमारतींमुळे घरटे नाही दाणे मिळणे बंद झाडांची कत्तल गोफणीतून दगड मारणे पंख कापले जाणे छोटासा जीव सहन न होणे चिमणी चित्रात पाहणे

सांगली मिशन सोसायटी शिक्षण मंडळ

द्वितीय सत्रात परीक्षा - २०१९-२०

रोल न.

इयत्ता ६ वी

विषय : हिंदी

अंक : ४०

प्र १ अ) रिक्त स्थानों की पूर्ति करो

[४]

- १) अंग्रेजी में ----- है सुबह का फल सोना है।
- २) भारत में २९ राज्य और ७ ----- प्रदेश है।
- ३) चिंकी का घोंसला पेड़ की ----- पर है।

आ) सही गलत लिखो ।

[२]

- १) युद्ध में लोहे के अस्त्र -शस्त्र काम देती है ।
- २) फल भूखे पेट नहीं खाना चाहिए ।

इ) निम्नलिखित वाक्य किसने किससे कहे है।

[२]

- १) लो, अब हो गया कार्यक्रम का बंटधार।
- २) अपने बच्चों को बचाना । उन्हें मेरे घोंसले में छिपा दो ।

ई) एक वाक्य में उत्तर लिखो।

[५]

- १) बैंक में सबसे महत्वपूर्ण व्यक्ति को है?
- २) हमें धीरज क्यों धरना चाहिए ?
- ३) कागज की थैली बनाने के लिए कौनसी सामग्री लगाती है?
- ४) किन किन सब्जियों की गिनती अच्छी, हरी सब्जियों में होती है?
- ५) टीटू और चिंकी के बच्चों ने किसकी ताकद को देख लिया था?

प्र २ अ) कविता की पंक्तियाँ पूर्ण करो ।

[२]

१) सबसे प्रथम -----

----- वह देश कौन सा है?

आ) निम्नलिखित प्रश्नों के उत्तर तीन चार वाक्यों में लिखो ।

[६]

- १) पत्र में मा. गांधीजीने स्वास्थ्य के बारे में कौनसी सूचनाएं दी है?
- २) टीटू गिलहरी के बारे में संक्षेप में जानकारी लिखो?
- ३) सोने और लोहे के उपयोग लिखो?
- ४) आनंद महोत्सव में कौन कौन सी दुकाने थीं?

- प्र ३ अ) निम्नलिखित मुखवारोंका अर्थ लिखकर वाक्य में प्रयोग करो।(किन्ही २) [२]
- १) एक और एक ग्यारह होते हैं -
२) इजाजत मिलना -
३) दिन लद जाना -
- आ) समानार्थी शब्द लिखो । [२]
- १) उजाला २) सुधा
- इ) विरुद्धार्थी शब्द लिखो । [२]
- १) उचित २) अपमान
- उ) बहुवचन रूप लिखो । [१]
- १) टोकरी २) कारखाना
- ऊ) निम्नलिखित विशेषण शब्दों का वाक्य में प्रयोग करके उनके प्रकार लिखो । [२]
- १) पाँच २) कुछ
- प्र ४ अ) निम्नलिखित वाक्यों का काल पहचानो । [२]
- १) हिमालय सबसे ऊँचा पर्वत है।
२) पेटूराम ने दस लड्डू खाए थे।
- आ) निम्नलिखित कारकोंका अपने वाक्य में प्रयोग करो। [२]
- १) को २) से
- इ) निम्नलिखित शब्दों को प्रत्यय लगाकर लिखो । [२]
- १) घबराना २) गुण
- प्र ५ अ) निम्नलिखित किसी एक विषय पर निबंध लिखो । [४]
- १) एकता का महत्व २) स्वास्थ्य ही संपदा है ३) मेरा देश