

DEPARTMENT OF EDUCATION, SANGLI MISSION SOCIETY
ANNUAL EXAM 2019 – 20

STD : V

GENERAL KNOWLEDGE

MARKS: 25

Q.1 Fill in the blanks

(Marks 5)

(Coach, Assam, Columbus, Kolkata, Aristotle)

1. _____ set out to find India but found America.
2. _____ state in India is the largest producer of tea.
3. Eden Gardens stadium is located _____.
4. _____ was the teacher of Alexander.
5. The Dronacharya Award is given to best _____.

Q.2 Match the following

(Marks 5)

A

B

- | | |
|----------------|-------------|
| 1. Switzerland | a) Kingston |
| 2. Iraq | b) Baghdad |
| 3. Cuba | c) Abuja |
| 4. Nigeria | d) Bern |
| 5. Jamaica | e) Havana |

Q.3 Write true or false

(Marks 5)

1. Hirakud project stands on the river Sutlej.
2. The stomach is a bag of acid that breaks down food.
3. River Nile is the longest river in the world.
4. Himachal Pradesh borders Pakistan and China.
5. A compass needle is a magnet that always points north- south.

Q.4 Answer the following in one word.


(Marks 5)

1. Which is the natural hardest substance?
2. Where was Mahatma Gandhi born?
3. Which gas is used to fill weather balloon ?
4. Which is the largest country in population ?
5. Who discovered the sea route to Australia ?

Q.5 Identify the picture and write their names.

(Marks 5)


1.



2.



3.



4.



5.



**DEPARTMENT OF EDUCATION, SANGLI MISSION SOCIETY
ANNUAL EXAM 2019 – 20**

STD : V

EVS - II

MARKS: 10

Q 1) A) Fill in the blanks.

[2]

1. _____ had largely turned to fishing.
2. The houses at the beginning of the New Stone Age were made of _____ & _____.
3. Museums in _____ had large collection of pre-historic artifacts & antique objects.
4. _____ in Rajasthan are among the famous sites of Harappan Civilization in India.

Q1 B) Match the following.

[2]

A	B
Mesopotamia	String instruments
Egypt	Lord of all living animals
Balag	The land between two rivers.
Pashupati	The river Nile

Q 2) Answer in one sentence

[2]

- 1) What are the characteristics of the new Stone Age?
- 2) What articles were the Harappan craftsmen skilled at making?

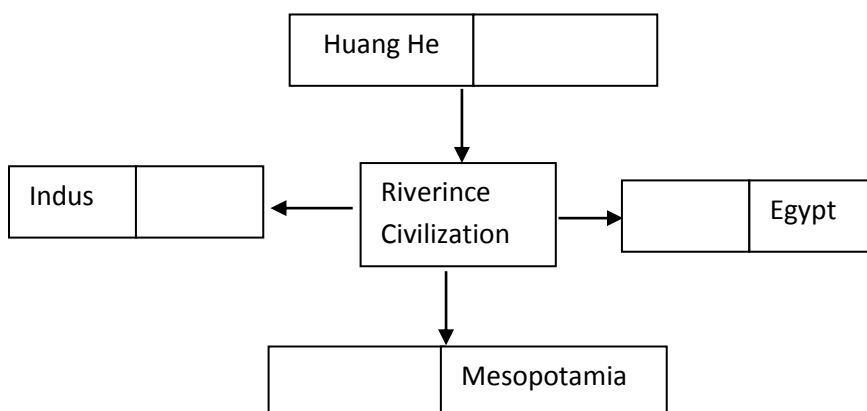
Q3) A) Answer in brief. (Any one)

[2]

- 1) How did some people in the community become skilled craftsmen?
- 2) What made the soil on the banks of the Nile fertile?

Q3) B) Complete the following chart

[10]



**DEPARTMENT OF EDUCATION, SANGLI MISSION SOCIETY
ANNUAL EXAM 2019 – 20**

STD : V

MATHEMATICS

MARKS: 40

Q.1. Solve the Following

[5]

1. Find the volume of a cube of edge 27cm.
2. Find whether the following is profit or loss. C.P. = ₹9000 S.P. = ₹ 8595.
3. Convert minutes into hours and minutes: 752minutes.
4. Subtract: $0.6 - 0.49$.
5. Convert into km: 84762 dam

Q.2 Solve the following (Any 6)

[12]

1. Convert into Fahrenheit scale: 75°C .
2. Find the C.P. when S.P. = ₹ 500; Profit = ₹85.
3. Find the area of the rectangle with length = 24cm; breadth = 43cm.
4. Multiply: 7 kl 250 l by 63.
5. Add: $85.179 + 256.23 + 49.2$
6. Subtract: 5g 8dg 9cg 7mg from 9g 8dg 5cg 2mg.

Q.3. Solve the Following (Any 5)

[15]

1. Add: 20hrs 54min 31sec and 8hrs 26min 45sec.
2. A vendor bought some eggs for ₹450. He sold the eggs at a loss of ₹175. Find the S.P. of the eggs.
3. A car travels 240 km in 12 litres of petrol. How much distance will it cover in 18 litres of petrol.
4. A block of metal is 18cm long, 14cm broad and 7cm high. Find the volume of 7 such blocks.
5. Find the perimeter of the rectangular flower bed which is 56m long and 29m broad. Also find its area.
6. Use a protractor to draw the $\angle PQR = 85^{\circ}$.

Q.4 Solve the Following (Any 2)

[8]

1. a) Subtract: 5 years 7months from 21 years 5 months
b) Find the no of days: From 8th march 2019 to 25th July 2019.
2. The total weight of Shikha and her parents is 152kg 700gm. Her father weighs 65kg 200gm and her mother weighs 58kg750gm. What is the weight of Shikha?
3. The School fees for 4 months is ₹5000. Find the fees for the whole year.

**DEPARTMENT OF EDUCATION, SANGLI MISSION SOCIETY
ANNUAL EXAM 2019 – 20**

STD : V

ENV – I

MARKS: 30

Q.1A.Fill in the blanks **[5]**

1. Another word for air sacs is _____
2. _____ is required to do work
3. Spittle of tuberculosis patients is covered with a germicide called _____
4. Lack of vitamin A causes _____
5. Fuel used in a automobiles causes _____ and _____ pollution.

B. Write true or false **[3]**

1. There is a ban on spitting in public places.
2. Intestinal diseases spread through air.
3. We get rain water throughout the year.

C. Match the following **[2]**

- | A | B |
|------------------|--------------------|
| 1. Starchy foods | a) pulses |
| 2. Proteins | b) iron |
| 3. itamins | c) bran of cereals |
| 4. Minerals | d) jowar |

Q.2A.Name the following **[3]**

1. Write the length of the small intestine of an adult.
2. Another name for food pipe
3. Name the organs that bring about respiration.

B. Answer in one sentence [any 4] **[4]**

1. What is an infectious disease?
2. What is meant by physical growth?
3. What are carbohydrates?
4. What is blood circulation?
5. What are sanctuaries?

Q.3A. Answer in brief [any 4] **[6]**

1. What is meant by coping with emotions?
2. Why are proteins required in our diet?
3. Why must we know our flaws?
4. Describe the life cycle of birds?
5. Write down the educational use of mass media?

B. Give reasons [any 2] **[4]**

1. You are very hungry, but the food has been left uncovered.
2. What skills do we already have before we learn to ride a bicycle?
3. Why are children told to drink milk every day?

Q.4 Draw and label the digestive system **[3]**

**DEPARTMENT OF EDUCATION, SANGLI MISSION SOCIETY
ANNUAL EXAM 2019 – 20**

STD : V

ENGLISH – I

MARKS: 40

Q 1. Quote the first six lines from the poem “ A Lark ” [4]

Lark bird -----
----- in the sea ?

Q 2.A] Write meanings. [3]

[1] pleasing [2] summoned [3] panted

B] Make sentence of your own [3]

[1] darted [2] to get rid of [3] traditional

Q 3. A] Match the following. [3]

- | | |
|-------------------------------------------|---------------|
| 1) Before | [a] Dart |
| 2) unevenly cut or torn edges | [b] Ere |
| 3) Move suddenly and rapidly | [c] shaggy |
| 4) Long, rough and tangled | [d] monstrous |
| 5) Huge, imaginary, large and frightening | [f] ripples |
| 6) small waves | [g] jagged |

B] Who said to Whom [3]

- 1) “You have no right to keep your belongings in his property.”
- 2) “ That could be quiet dangerous. We musn’t leave it growing there.”
- 3) “ What do you mean – haven’t you sold this well to me?”

Q 4. A] Answer in one sentence [6]

- 1) 1] How did Helen overcome her handicaps?
- 2) What is a password?
- 3) What mistake did the man in the moon make?
- 4) Why should we spend the money carefully?
- 5) When do parents feel sorry and become unhappy?
- 6) How do the ripples look to the poet and what do they do?

B] Answer in brief [any three] [6]

- 1) Write a few lines on ‘Braille.’
- 2) What are search engines?
- 3) What did judge tell Ahamed?
- 4) Write a few lines on the character Dorothy.

Q 5 A] Write long form of the following : [4]

- 1) I T
- 2) C R S
- 3) R O M
- 4) C A D

B] Fill in the blanks [4]

- 1) The currency of United States is -----
- 2) In England, the currency used is -----
- 3) Paper money was first used in -----
- 4) Paper money, or note is a ----- to give that much money.

Q 6. Write autobiography of a two-thousand rupee note in 8 to 10 lines.[4]

**DEPARTMENT OF EDUCATION, SANGLI MISSION SOCIETY
ANNUAL EXAM 2019 – 20**

STD : V

ENGLISH – II

MARKS: 50

QI] Match the items and make sentences with 'When' . [4]

- | | |
|---------------------|------------------------|
| 1) she is tired | everybody clapped . |
| 2) I phoned her | she loves to watch TV. |
| 3) the show ended | I always go swimming . |
| 4) I have a holiday | there was no answer . |

QII] Write the days and dates . [4]

- 1) When was Gandhiji born ?
- 2) When did India become free ?
- 3) When do you have the rainy season ?
- 4) When do you have Christmas ?

QIII] Put a cross (X) against sentences that are wrong .Underline the mistake and correct it .

[4]

- 1) A liar is a person which tells lies .
- 2) A kite is a toy who can fly in the air .
- 3) There was nobody who could do the sum .
- 4) He was the man who could help you .

QIV] Rewrite each sentence using suitable Punctuation Marks and Capital Letters where necessary . [4]

- 1) isneeru a good dancer
- 2) madhus sister isnt a good dancer
- 3) preeti is a good dancer said richas sister
- 4) they are pulling the little dogs tail and the dog is crying

QV] Rewrite each sentence in Reported Speech . [4]

- 1) Mother said to Neha, ``Here is a gift for you.”
- 2) Neeru said to Neha, ``I saw Mohan in the park.”
- 3) Atul said to his sister, ``You are waisting my time.”
- 4) She said to her mother, ``I am not feeling well today.”

QVI] Rewrite each sentence in Indirect speech . [4]

- 1) Jill said, “I fell down that hill.”
- 2) Tom said, “I have finished my work.”
- 3) She said, “My father has come back.”
- 4) Manu said, “I am living here with my brother .”

QVII] Choose expressions from the box and make sentences that can go with the given sentences. Use must or mustn't . [4]

[I/ hurry ; I /go /to the optician's ; We/ make/ any noise ; You/ see/ a doctor]

- 1) You're ill. _____
- 2) Be quiet . _____
- 3) I'm late for work. _____
- 4) My glasses are broken . _____

QVIII] Correct these sentences . [4]

- 1) My watch has been stole .
- 2) Sugar is make from sugarcane .
- 3) TheTaj was build by Shah Jahan .
- 4) This work should be finish in time .

QIX] Add the correct form of It is to the following . [5]

- 1) _____ fine today .
- 2) _____ a long time ago .
- 3) _____ very hot last night .
- 4) _____ a long way to Delhi .
- 5) _____ raining since nine O'clock .

QX] Look at the answers and complete the Questions . [5]

- 1) Who is _____ ? Nancy is standing there .

- 2) What do _____ ? I want some money .
- 3) Where do _____ ? Children play in the park .
- 4) How did _____ ? I went to Delhi by car .
- 5) Which car _____ ? They sold their old car .

QXI] Read the given passage and answer the following questions. [8]

One of the problems that our earth faces is that of pollution. This problem worsen when we pull down our forests. It is rightly said that forests are the 'lungs' of the earth. Trees and plants purify the air. The leaves of the trees take in carbon dioxide from the air and give out precious oxygen.

Forests keep the weather on the earth equable and healthy. They bring rain. They prevent soil erosion. Forests are the homes of many animals and plants. We get herbs and wood from the forest. There is no doubt that forests are our 'lifelines'.

Questions :

- 1) What is one of the problems that our earth faces ? [1]
- 2) What do trees take in from the air ? [1]
- 3) Which two words are used in the passage to describe forests ? [2]
- 4) Leaves take in carbon dioxide .(Frame a Wh-question to get the underlined part as the answer). [1]
- 5) Match the words with their opposites [2]
 - (a) worse polluted
 - (b) healthy certainly
 - (c) pure sickly
 - (d) doubt better
- 6) Mention any two other problems that our earth faces .[1]

सांगली मिशन सोसायटी , शिक्षण मंडळ

द्वितीय सत्र परीक्षा - २०१९-२०

इयत्ता ५ वी

विषय : मराठी

गुण:३०

प्र.१ अ] रिकाम्या जागा भरा.

[४]

१. _____ रूपाने पर्वतावरून खाली येते.
२. सगळ्यांनी मालतीच्या _____ कौतुक केले.
३. हे आपलं महिन्याभराच _____ सामान आहे.
४. मधात _____ गुण असतात.

आ] कोण ते लिहा .

[३]

- १) बागेत स्वछंदपणे फिरणारे .
- २) पैसे परत करणारे.
- ३) कोऱ्या पत्राचे गुपित सांगणारी.

इ) एका वाक्यात उत्तरे लिहा .

[५]

१. नदी मोठी कशी होते?
२. चोराने बैलाचा कोणता डोळा अधू आहे असे सांगितले ?
३. छोटेसे बहीण भाऊ उदयाला कसे होणार आहेत ?
- ४ विठ्ठलाचा जन्म कोठे झाला ?
- ५ मधमाशी कशासाठी बाहेर आली?

प्र २ अ) कवितेच्या ओळी पूर्ण करा.

[२]

करू चला _____

_____ भेटायला

आ) खालील प्रश्नांची थोडक्यात उत्तरे लिहा (कोणतेही ३)

[६]

- १) मालतीने कोणती युक्ती केली ?
- २) विठ्ठलाचा दयाळूपणा कोणत्या प्रसंगावरून दिसून येतो?
- ३) मुलांनी कोणकोणती चित्रे काढली?
- ४) चोराची भंबेरी का उडाली?
- ५) विठ्ठलचे कोणकोणते गुण या पाठात दिसून येतात?
- ६) तुम्हाला काय काय पाहिल्यानंतर आनंद होतो?

प्र ३ अ) समानार्थी शब्द लिहा.

[१]

- १) आभाळ
- २) वृक्ष

आ) विरुद्धार्थी शब्द लिहा.

[१]

- १) डावा
- २) जिंकणे

प्र ४ अ) खालील वाक्ये वाचा किया करणारी व्यक्ती कोण ते ओळखा योग्य रखान्यात ✓

अशी खूण करा नामांचे लिंग व क्रियापद ओळखा.

[४]

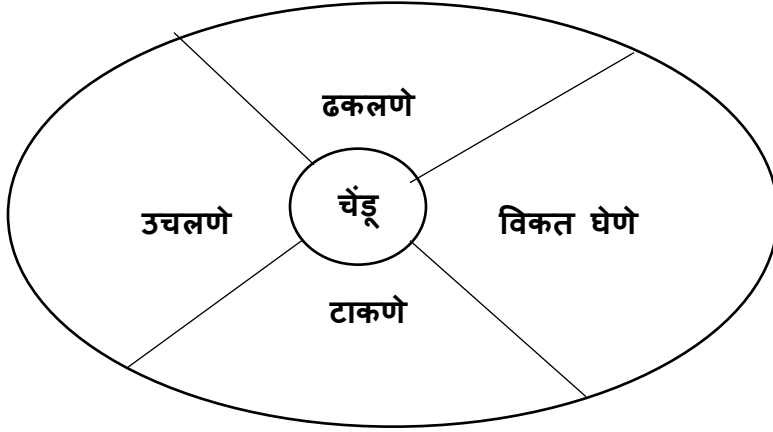
वाक्ये	क्रियापद	नाम	क्रिया करणारी व्यक्ती		
			पुरुष	स्त्री	इतर
१) बाबानी आईला पैसे दिले					
२) मायाने दार उघडले					
३) कावळा झाडावर राहतो					
४) रेशमाने पत्र वाचले					

आ) कंसात दिलेल्या शब्दांचे विरुद्ध अर्थ असलेले शब्द वापरून खालील वाक्ये पूर्ण करा. [२]

१) ससा हा प्राणी _____ असतो (धीट)

२) हरवलेला चेंडू सापडल्याने लमा खूप _____ झाला (दुःख)

इ) गोलातील शब्द जोडून वाक्ये बनवा. [४]



ई) पुढील अंक अक्षरात लिहा. [२]

१) ८७

२) ९९

उ) पुढील शब्दांचा वाक्यात उपयोग करा. [२]

१) मोठेपणा

२) चांगुलपणा

प्र ५ खालील पैकी एका विषयावर ८ ते १० ओळी निबंध लिहा. [४]

१) माझे आवडते फुल.

२) मी केलेली सहल.

३) माझा आवडता खेळ.

सांगली मिशन सोसायटी शिक्षण मंडळ

द्वितीय सत्रात परीक्षा - २०१९-२०

रोल न.

इयत्ता ५ वी

विषय : हिंदी

अंक : ४०

प्र १ अ) रिक्त स्थानों की पूर्ति करो

[४]

- १) आज़ादी मिलने के बाद देश का ----- बनाया गया।
- २) दोनों की ----- भिन्न हैं ।
- ३) इस तरह शुरू हो गया ----- गाड़ी का खेल ।
- ४) चौराहे पर ----- दिखाई दे रहा हैं ।

ब) दिए गए पर्ययो में से सही उत्तर चुनकर लिखो ।

[२]

- १) हमें सूरज के समान ----- ।
अ) ऊपर उठाना हैं। ब) मुस्कराना हैं। क) जगमगाना हैं।
- २) २६ जनवरी को ----- ।
अ) स्वतंत्रता दिवस मनाया जाता हैं।
ब) गणतंत्र दिवस मनाया जाता हैं ।
क) बाल दिवस मनाया जाता हैं ।

क) सही विधान के सामने और गलत विधान के सामने का चिन्ह लगाओ।

[२]

- १) दूर्वा खूब बन-ठनकर आई थी ।
- २) सुदामा के अनुसार खत खेत में डालते हैं।

ड) किसने किससे कहाँ हैं।

[३]

- १) अब मैं तुम सबके काम आ सकता हूँ ।
- २) तुम क्यों पानी भरने चली आई।
- ३) "पहले मैं हाजिरी लुँगा।

प्र २ अ) एक वाक्या में उत्तर लिखो।

[५]

- १) सुदामा के अनुसार शिक्षा कहाँ मिलती हैं?
- २) छह ऋतुओं के नाम क्रम से लिखो?
- ३) दूसरी स्त्री के बेटे से कौन घबराते थे?
- ४) पानी और धुप पाकर क्या हुआ ?
- ५) दोनों भाई कहाँ रहते थे?

आ) कविता की पंक्तियाँ पूर्ण करो ।

[२]

यह ऐसी धरती -----

----- धुन सी रहती।

इ) निम्नलिखित प्रश्नों के उत्तर तीन-चार वाक्यों में लिखो । (किन्ही २)

[४]

- १) भूकंप आने पर क्या करना चाहिए ?
- २) आदर्श गाँव में सफाई की क्या व्यवस्था थी?
- ३) सावित्रीबाई फुले के बारे में जानकारी लिखो?

प्र ३ अ) समानार्थी शब्द लिखो।

[२]

- १) सूचना
- २) बखान
- ३) प्रणाम
- ४) आँख

ब) विरुद्धार्थी शब्द लिखो ।

[२]

- १) खुला x
- २) सुगंध x
- ३) आज़ादी x
- ४) देश x

- क) शब्दों के बहुवचन रूप लिखो । [२]
१) इमारत २) तारा ३) भाषा ४) पेड़
- ड) शब्दों के लिंग बदलकर लिखो । [२]
१) स्त्री २) मोर ३) बकरी ४) बिल्ली
- प्र ४ अ) निम्नलिखित शब्दों से उपसर्ग एवं प्रत्ययों को अलग करके लिखो । [२]
१) प्रतिदिन २) दृश्यमान
- आ) निचे दिए गए वाक्यों में उचित विरामचिन्ह लगाओ । [२]
१) वाह यह चित्र कितना सुंदर है
२) अरे बंडूभाऊ मैं क्यों शिक्षा दूँ
- इ) अंक अक्षरों में लिखो । [२]
१) ५३ २) ६५ ३) ७५ ४) ७०
- प्र ५ अ) निम्नलिखित किसी एक विषय पर ७ - ८ वाक्यों में निबंध लिखो । [४]
१) मेरा गाँव २) मेरी माँ ३) मेरा प्रिय त्योहार
