

# सांगली मिशन सोसायटी शिक्षण मंडळ

द्वितीय सत्रात परीक्षा - २०१९-२०

रोल न.

इयत्ता २ री

विषय : मराठी

गुण: ४०

प्र १ ला अ] रिकाम्या जागी कंसातील योग्य शब्द लिहा.

[३]

[ तिरंगी , उंच , जा , ये , घे , दे ]

- १) घरी लवकर परत \_\_\_\_\_
- २) राष्ट्रध्वज \_\_\_\_\_ आहे.
- ३) हिमालय \_\_\_\_\_ आहे.
- ४) बाजारात \_\_\_\_\_
- ५) पैसे मोजून \_\_\_\_\_
- ६) उरलेले पैसे परत \_\_\_\_\_

ब) जोड्या जुळवा.

[३]

'अ' गट	उत्तरे	'ब' गट
१) दमून दमून	_____	पतंग उडवत होती.
२) हळूच शिरलं	_____	झोपेला आलं.
३) अना	_____	आईच्या कुशीत.
४) आकाश	_____	पाच लिटर.
५) किलो पुरी खातात	_____	निळे दिसत होते.
६) दूध पितात	_____	दहा किलो.

प्र २ अ] एका शब्दात उत्तरे लिहा

[७]

- १) काम शब्द ऐकताच लोठेबाबांना काय येतो? \_\_\_\_\_
- २) रंगबेरंगी पतंग कोठे दिसत होते? \_\_\_\_\_
- ३) कोकरूने कश्याच्या उशीवर डोके ठेवले? \_\_\_\_\_

४) कोण खूप थकलं? \_\_\_\_\_

५) काय जोराने सुटला होता ? \_\_\_\_\_

६) सगळे पतंग उडवण्यासाठी कोठे आले ? \_\_\_\_\_

७) पतंग उडवून मुलांना काय आली? \_\_\_\_\_

**ब) कोण कोणास म्हणाले ते लिहा**

[२]

१) "महाराज , झाली कि नाही तुमची रेघ लहान?"

उत्तर: \_\_\_\_\_

२) "हि रेघ पाहिलीस? हि रेघ लागण करायची , पण पुसायची नाही , जमेल तुला?"

उत्तर: \_\_\_\_\_

**प्र ३ अ] चित्र पहा वाक्य लिहा**

[४]



\_\_\_\_\_



\_\_\_\_\_



\_\_\_\_\_



\_\_\_\_\_

ब] बाराखडी लिहा.

[३]

म

---

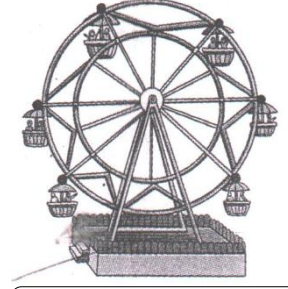

---

---

---

प्र ४ अ] चित्र बघा नवे लिहा.

[२ ½]



ब] शब्द लिहा.

[४]

१) 'ठ' चे शब्द लिहा

१) \_\_\_\_\_

२) \_\_\_\_\_

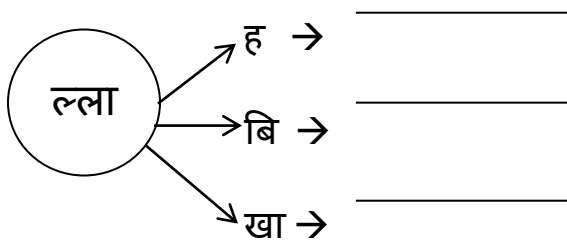
२) 'ढ' चे शब्द लिहा

१) \_\_\_\_\_

२) \_\_\_\_\_

प्र ५ अ] गोलातील अक्षराला गोळाबाहेर चौकटीमधील अक्षर जोडून शब्द तयार करा

[३]



ब] योग्य त्या फळाचे नाव लिहा.

[२]

१) वसई \_\_\_\_\_

२) काश्मीर \_\_\_\_\_

प्र ६ अ] अंक अक्षरात लिहा

[२½]

१६ - \_\_\_\_\_

१७- \_\_\_\_\_

१८- \_\_\_\_\_

१९- \_\_\_\_\_

२०- \_\_\_\_\_

ब] माझा भारत या विषयी चार ओली लिहा.

[४]

---

---

---

---

---

DEPARTMENT OF EDUCATION, SANGLI MISSION SOCIETY

ANNUAL EXAM 2019 - 20

STD. II

ENGLISH - I

Marks: 40

Name: \_\_\_\_\_

Roll no. \_\_\_\_\_

Q.I Write the Poem (8 lines) "Granny Granny"

[4]

---

---

---

---

---

---

---

---

---

---

Q.II Write the rhyming words :-

[2]

1) knees - \_\_\_\_\_

2) caught - \_\_\_\_\_

3) seal - \_\_\_\_\_

4) finished - \_\_\_\_\_

Q.III Encircle the correct word:-

[2]

1) away            avay            avaiy

2) Breeze           Breaze           Breez

3) peano           piano           pieano

4) cokonut           cocoanut           coconut

**Q.IV Find in the blanks:-**

**[6]**

1. In winter, the wind blew strong and it started \_\_\_\_\_.
2. Tara lived with her \_\_\_\_\_.
3. Goopu \_\_\_\_\_ and said goodbye.
4. The road was full of \_\_\_\_\_.
5. The ant was storing \_\_\_\_\_ for the winter ahead.
6. Furry was the name of the \_\_\_\_\_.

**Q.V Change into past tense:-**

**[4]**

- |                  |                  |
|------------------|------------------|
| 1) drink - _____ | 2) speak - _____ |
| 3) tell - _____  | 4) stop - _____  |
| 5) Knock - _____ | 6) sleep - _____ |
| 7) shake - _____ | 8) make - _____  |

**Q.VI Write True or False :-**

**[3]**

1. The music man plays guitar. \_\_\_\_\_
2. The people ran away as fast as the \_\_\_\_\_ could.
3. Tara was a poor girl. \_\_\_\_\_
4. A little pig loved to make a row. \_\_\_\_\_
5. Once there lived an active grasshopper. \_\_\_\_\_
6. A duck only said "Croak – croak." \_\_\_\_\_

**Q.VII Name some musical instruments.** [2]

1) \_\_\_\_\_ 2) \_\_\_\_\_

3) \_\_\_\_\_ 4) \_\_\_\_\_

**Q.VIII Write the meanings of :-** [5]

1) cushion - \_\_\_\_\_

2) replied - \_\_\_\_\_

3) store - \_\_\_\_\_

4) strange - \_\_\_\_\_

**Q.IX Frame your own sentences :-** [5]

1) Magic : \_\_\_\_\_

2) village : \_\_\_\_\_

3) delicious : \_\_\_\_\_

4) Granny : \_\_\_\_\_

5) music : \_\_\_\_\_

**Q.X Answer the following:-** [7]

1) Why did the farmer tell Goopu to see the world?

Ans \_\_\_\_\_

\_\_\_\_\_

2) What does the Granny rub on her hair?

Ans \_\_\_\_\_

\_\_\_\_\_

3) What did the old woman give Tara?

Ans \_\_\_\_\_

\_\_\_\_\_

4) How did the grasshopper spend his day?

Ans \_\_\_\_\_

\_\_\_\_\_

5) Where does the music man come from?

Ans \_\_\_\_\_

\_\_\_\_\_

6) Why was the lazy grasshopper left as hungry as before?

Ans \_\_\_\_\_

\_\_\_\_\_

7) What does the little want her Granny to do?

Ans \_\_\_\_\_

\_\_\_\_\_

\*\*\*\*\*



DEPARTMENT OF EDUCATION, SANGLI MISSION SOCIETY

ANNUAL EXAM 2019 - 20

STD. II

ENGLISH - II

Marks: 25

Name: \_\_\_\_\_

Roll no. \_\_\_\_\_

Q1. Begin the questions with 'What', 'When', 'Where' and 'Who'.

2

i) \_\_\_\_\_ does this shopkeeper sell ?

ii) \_\_\_\_\_ do you do your homework ?

iii) \_\_\_\_\_ is talking in the room ?

ii) \_\_\_\_\_ is the post-office ?

Q2. Classify count and uncount nouns.

3

Bread	Girl	Count Nouns	Uncount Nouns
Shoe	Cheese		
Cup	Coffee		

Q3. Correct these sentences.

2

i) The moon shine at night.

Ans. \_\_\_\_\_

ii) You tells lies.

Ans. \_\_\_\_\_

iii) Rani finish her homework.

Ans. \_\_\_\_\_

iv) Children plays with toys.

Ans. \_\_\_\_\_

**Q4. Write each sentence with singular subject.**

**4**

i) They come to this park daily.

Ans. \_\_\_\_\_

ii) My parents give me money.

Ans. \_\_\_\_\_

iii) These boys make noise in the class.

Ans. \_\_\_\_\_

iv) The teachers teach us at school.

Ans. \_\_\_\_\_

**Q5. Rewrite each sentence using the short form of underlined words.**

**2**

i) She is making a doll.

Ans. \_\_\_\_\_

ii) We are playing a match.

Ans. \_\_\_\_\_

iii) She is not wearing a hat.

Ans. \_\_\_\_\_

iv) They are not playing football.

Ans. \_\_\_\_\_

**Q6. Rewrite each sentence in plural.**

**4**

i) A noun is a word.

Ans. \_\_\_\_\_

ii) A city is a big town.

Ans. \_\_\_\_\_

iii) An eagle is a bird.

Ans. \_\_\_\_\_

iv) A wife is a woman.

Ans. \_\_\_\_\_

**Q7. Rewrite each negative questions in the short forms.**

**3**

i) Do these cows not give milk ?

Ans. \_\_\_\_\_

ii) Does the sun not set in the west ?

Ans. \_\_\_\_\_

iii) Do all fish not live in water ?

Ans. \_\_\_\_\_



**DEPARTMENT OF EDUCATION, SANGLI MISSION SOCIETY**  
**ANNUAL EXAM 2019 - 20**  
**ENV**

**STD. II**

**Name:** \_\_\_\_\_

**Marks: 25**

**Roll no.** \_\_\_\_\_

---

**Q.I Fill in the Blanks**

**6**

1. A \_\_\_\_\_ is made up of snow.
2. The earth is \_\_\_\_\_ in shape.
3. The \_\_\_\_\_ is the satellite of the earth.
4. We get clothes from \_\_\_\_\_ of plants.
5. we wear \_\_\_\_\_ clothes in summer.
6. The train s run on the \_\_\_\_\_ .

**Q.II Write true or false**

**3**

1. The painter paints the house.
2. An auto-rickshaw is faster than a Tonga.
3. A house provides shelter to us.
4. Airport is necessary for an aeroplane.
5. There are no lifts in high rise building.
6. Eskimos live in tents

**Q.III Rearrange the jumbled words**

**2**

1. rmboode - \_\_\_\_\_
2. entt- \_\_\_\_\_
3. ncektih - \_\_\_\_\_
4. cwlha - \_\_\_\_\_

**Q.IV Name of the following**

**4**

1. Vehicle that move slowly. \_\_\_\_\_
2. Vehicle that carry goods. \_\_\_\_\_
3. The second planet. \_\_\_\_\_
4. The planet with rings \_\_\_\_\_
5. Vehicles that have two wheels \_\_\_\_\_
6. Biggest planet of the solar system. \_\_\_\_\_
7. Two people who wear uniform. \_\_\_\_\_, \_\_\_\_\_

**Q.V Match the following**

**4**

<b>A</b>	<b>Answer</b>	<b>B</b>
1. winter	_____	a. pulledby animals
2. moon	_____	b. fits electric wire
3. A painter	_____	c. cotton clothes
4. summer	_____	d. the third planet
5. A plumber	_____	e. woolen clothes
6. Aero plane	_____	f. paints the house
7. bullock cart	_____	g. satellite of earth
8. earth	_____	h. Air transport

**Q.VI Answer the following**

1. Why do we wear clothes?

Ans: \_\_\_\_\_

\_\_\_\_\_

2. What are planets?

Ans: \_\_\_\_\_

\_\_\_\_\_

3. Name three kinds of temporary houses?

Ans: \_\_\_\_\_

\_\_\_\_\_

4. What is the solar system?

Ans: \_\_\_\_\_

\_\_\_\_\_

5. What is uniform?

Ans: \_\_\_\_\_

\_\_\_\_\_

6. Why do we need a house?

Ans: \_\_\_\_\_

\_\_\_\_\_

STD. II

MATHEMATICS

Marks: 40

Name: \_\_\_\_\_

Roll no. \_\_\_\_\_

**Q1. Tick the correct answer.**

5

i) Any number multiplied by 0, gives the product \_\_\_\_\_

- a) 0       b) the number itself       c) 1

ii)  $8 \times 0$  is \_\_\_\_\_

- a) 0       b) 8       c) 1

iii) \_\_\_\_\_ comes in between June and August.

- a) July       b) September       c) May

iv)  $50 + 50 + 50$  make \_\_\_\_\_

- a) 50       b) 100       c) 150

v) 4 is same as \_\_\_\_\_

- a) 40p       b) 400p       c) 150p

**Q2. Fill in the blanks.**

6

i)  $14 \times \underline{\hspace{2cm}} = 140$

ii) In a year there are \_\_\_\_\_ days.

iii) \_\_\_\_\_ is the shortest month of the year.

iv) If the time is in half hours, the minute hand is at \_\_\_\_\_


v) May comes after \_\_\_\_\_

vi) Last month of the year \_\_\_\_\_




**Q3. Fill in the time in the digital clock.**


**3**



9 O'Clock



Half past 7



Quarter past 4

**Q4. Find the value of each collection of notes and coins.**

**2**

i)  $\boxed{200}$   $\boxed{50}$   $\boxed{10}$  = Rs \_\_\_\_\_

ii)  $\boxed{10}$   $\boxed{10}$   $\bigcirc 5$   $\bigcirc 5$   $\bigcirc 2$  = Rs \_\_\_\_\_

**Q5. Add the following.**

**3**

i) Rs 1 2 4      ii) Rs 5 3 6      iii) Rs 2 6  
+ Rs 3 0 1      + Rs 3 4 2      + Rs 5 7  
 $\boxed{\phantom{000}}$        $\boxed{\phantom{000}}$        $\boxed{\phantom{000}}$

**Q6. Write the addition and multiplication sentence.**

**2**

i) 4 times 5 \_\_\_\_\_ = \_\_\_\_\_

ii) 6 times 1 \_\_\_\_\_ = \_\_\_\_\_

**Q7. Subtract the following.**

**3**

i)  $\begin{array}{r} 97\text{ p} \\ - 62\text{ p} \\ \hline \end{array}$       ii)  $\begin{array}{r} \text{Rs } 475 \\ - \text{Rs } 152 \\ \hline \end{array}$       iii)  $\begin{array}{r} \text{Rs } 748 \\ - \text{Rs } 326 \\ \hline \end{array}$   
 $\boxed{\phantom{000}}$        $\boxed{\phantom{000}}$        $\boxed{\phantom{000}}$

**Q8. Convert into paise.**

**2**

i) Rupees 9 = \_\_\_\_\_p

ii) Rupees 4 and 95 paise = \_\_\_\_\_p

**Q9. Multiply.**

**5**

i)  $24 \times 2$

	H	T	O

ii)  $21 \times 4$

	H	T	O

iii)  $76 \times 8$

	H	T	O

iv)  $312 \times 3$

	H	T	O

v)  $2 \times 8$

	H	T	O

**Q10. Convert into rupees and paise.**

**2**

i)  $645 \text{ p} = \text{Rs } \underline{\hspace{2cm}}$  and  $\underline{\hspace{2cm}} \text{ p}$

ii)  $905 \text{ p} = \text{Rs } \underline{\hspace{2cm}}$  and  $\underline{\hspace{2cm}} \text{ p}$

**Q11. Solve word problem.**


**2**

i) A basket has 18 mangoes. How many mangoes are there in 5 such baskets ?

Ans.

**Q.12. Draw the hands of clock to show the given time.**

**3**



2 O'Clock or  
2:00



Quarter past 4 or  
4:15



Half past 8 or  
8:30

**Q13. Write the table of 12.**

**2**


\*\*\*\*\*

**DEPARTMENT OF EDUCATION, SANGLI MISSION SOCIETY**  
**ANNUAL EXAM 2019 – 20**  
**GENERAL KNOWLEDGE**

**STD. II**

**Name:** \_\_\_\_\_

**Marks: 25**

**Roll no.** \_\_\_\_\_

---

**Q1. Tick the correct answer**

**[5]**

1) \_\_\_\_\_ is our national game.

- a) Cricket       b) Hockey       c) Football

2) A person who conducts music in an orchestra is called \_\_\_\_\_

- a) Collector       b) Conductor       c) Clerk

3) \_\_\_\_\_ sings songs.

- a) Singing       b) Stronger       c) Singer

4) A person who paints studies stars and the sky is an \_\_\_\_\_

- a) Army       b) Abacus       c) Artist

5) A person who flies a plane is a \_\_\_\_\_

- a) Poem       b) Peon       c) Pilot

**Q2. Match the following**

**[5]**

**Group A**

**Group B**

1) 26<sup>th</sup> January \_\_\_\_\_

a) Teacher's day

2) 19<sup>th</sup> February \_\_\_\_\_

b) Gandhi Jayanti

3) 14<sup>th</sup> April \_\_\_\_\_

c) Republic Day

4) 5<sup>th</sup> September \_\_\_\_\_

d) Shivaji Jayanti

5) 2<sup>nd</sup> October \_\_\_\_\_

e) Ambedkar Jayanti

**Q3. Write 'Y' for Yes and 'N' for No.**

**[5]**

- 1) A dog lives in a stable.
- 2) The lion is called the king of the jungle.
- 3) Birds have teeth.
- 4) My father mother is my aunt.
- 5) The official language of India is English.

**Q4. What do these signs indicate**

**[5]**

1)



\_\_\_\_\_

2)



\_\_\_\_\_

3)



\_\_\_\_\_

4)



\_\_\_\_\_

5)



\_\_\_\_\_

**Q5. Answer the following Questions**

**[5]**

1) How is china well protected from invaders?

Ans:- \_\_\_\_\_  
\_\_\_\_\_

2) Which ocean is to the south of India?

Ans:- \_\_\_\_\_  
\_\_\_\_\_

3) Which of the seven wounders does India have?

Ans:- \_\_\_\_\_  
\_\_\_\_\_

4) Which is the largest country in area?

Ans:- \_\_\_\_\_  
\_\_\_\_\_

5) What was the old name of Kolkata?

Ans:- \_\_\_\_\_  
\_\_\_\_\_

\*\*\*\*\*